



QUIZ COMPETITION

- In a certain code – if TACHOU is written as ᱠᱤᱢᱤᱢᱤᱰᱤᱦ and ITEIMA as ᱠᱤᱢᱤᱢᱤᱰᱤᱦ , how would TAMOCHA be written in that code?
(A) ᱠᱤᱢᱤᱢᱤᱰᱤᱦ (B) ᱠᱤᱢᱤᱢᱤᱰᱤᱦ
(C) ᱠᱤᱢᱤᱢᱤᱰᱤᱦ (D) ᱠᱤᱢᱤᱢᱤᱰᱤᱦ
- If the word MOREH is coded as NLPNSQFDIG, how would you write NONEY in that code?
(A) OMNPOMDFXZ (B) OMPMONFXZD
(C) **OMPNO MFDZX** (D) None of these
- If white is called black, black is called blue, blue is called yellow, yellow is called red, red is called green, green is called violet and violet is called orange, what would be the colour of human blood?
(A) Red (B) Yellow
(C) **Green** (D) Violet
- If in a certain language CHRISTMAS is coded as CAMTSIRHS, how is CHEIRAOBA coded in that code?
(A) CHOAIEIRAB (B) **CBOARIEHA**
(C) CAHBOEARI (D) CEROABAIH
- In dictionary, which word comes fourth in arrangement?
(A) Competition (B) Compensation
(C) **Compromise** (D) Competitor
- P is Q's sister. R is Q's mother. S is R's father. T is S's mother. Then, P is S's?
(A) Grandfather (B) Grandmother
(C) Daughter (D) **Granddaughter**
- Complete analogous the pair: Planet: Earth: Satellite: _____?
(A) Asteroid (B) Solar System
(C) **Moon** (D) Sun
- Find the odd one out.
(A) Circle: Arc (B) Triangle: Side
(C) Flower: Petal (D) **Laptop: Mouse**
- What is next? : ZA, XC, UF, ...?
(A) RK (B) **QJ**
(C) WD (D) TG
- Among A, B, C, D and E, each having scored different marks. B has scored more marks than E and D. B has not scored the highest marks among them. Who among them scored second highest marks?
(A) B (B) **Data Inadequate**
(C) C (D) A
- Choose the number which is different from the others in the group?



- (A) 59 (B) 19
(C) 29 (D) **39**

12. What is next? : (2,3), (5,7), (11,13), (17,19), ...?

- (A) **(23,29)** (B) (29,31)
(C) (21,23) (D) (23,25)

13. Read the following statements and conclusions carefully. And decide which of the given conclusions logically follows from the given statements disregarding commonly known facts.

Statements:

All pens are books. All books are chairs. Some chairs are desks. Some desks are tables.

Conclusions:

- I. Some tables are chairs.
- II. Some desks are pens.
- III. Some chairs are pens.
- IV. All pens are chairs.

- (A) Only I and II follows. (B) Only I and III follows.
(C) Only II and IV follows. (D) **Only III and IV follows.**

14. The positions of the **first** and the **fifth** digits in the number 23416758 are interchanged. Similarly, the positions of the second and the sixth digits are interchanged and so on. Which of the following will be the third digit from the right end after the rearrangements?

- (A) **3** (B) 8
(C) 4 (D) 6

15. Choose the odd one?

- (A) Kathmandu (B) Thimphu
(C) **Istanbul** (D) Kuala Lumpur

Capitals of countries except Istanbul

16. Which one is odd?

- (A) Peso (B) Yen
(C) Lira (D) **Carat**

All are currencies except Carat

17. Choose the alternative which resembles the mirror image of the given combination : ECONOMICS

- (A) SCIMONOC3 (B) **SCIMONOC2**
(C) SCIMONOC3 (D) SCIMONOC3

18. How is Shyam's father's mother's only child's son's mother related to Shyam father?

- (A) **Wife** (B) Grandmother
(C) Mother (D) Sister

19. Tomba walks 10 km towards North. From there he walks 5 Km towards South. Then, he walks 3 Km towards east. How far and in which direction is he with reference to his starting point?

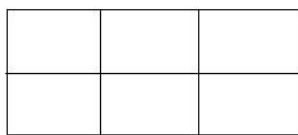


- (A) 5 Km North (B) 5 Km South-West
(C) **4 Km North-East** (D) 5 Km South.

20. Select the correct combination of mathematical signs to replace '*' signs and to balance the given equation: $4*5*4*2*11*2$

- (A) **$\times, +, -, \div, =$** (B) $+, -, \times, \div, =$
(C) $\times, -, \div, +, =$ (D) $\div, \times, +, -, =$

21. Find the number of rectangles in the figure below:



- (A) 12 (B) 14
(C) 16 (D) **18**

22. Choose the odd one out:

- (A) Tigress (B) Lioness
(C) Bitch (D) **Boar**

All are female except boar

23. If Year, Month, Week, Day are in this pattern, then choose the resemble pattern is

- (A) **Universe, earth, continent, country, state** (B) Class, Book, Chapter, Lesson, Pen
(C) House, Room, Table, chair, Clock (D) Earth, tree, Leaf, Root, Fruits.

24. Arrange the words given below in a meaningful and Logical sequence: 1. Table 2. Tree 3. Wood 4. Seed 5. Plant

- (A) **4,5,2,3,1** (B) 4,5,3,2,1
(C) 1,3,2,4,5 (D) 1,2,3,4,5

25. If Colour: Brush: Canvas is a meaningful sequence then such a sequence is

- (A) Watch: Dial:Strap (B) Book:Paper: Words
(C) Farmer: Plough: Field (D) **Ink: Pen: Paper**

26. In the following question, select the related word from the given alternatives.

Flower: Bud: Adult: ?

- (A) Male (B) **Baby**
(C) Children (D) Female

27. Select the related letter from the given alternatives. COMPUTER: RETUPMOC: STIURF :?,

- (A) **FRUITS** (B) FRIUTS
(C) FUIRTS (D) SHIRTS

28. Shanta and shiva were coming towards each other in the evening. Shanta noticed that Shiva's shadow was at left side of Shiva, then Shanta's face was in which direction?

- (A) **North** (B) South
(C) West (D) East



29. APIK's mother is the wife of TOMAL's father's son. TOMAL has no brothers and sisters. How is APIK related to TOMAL?

- (A) APIK and TOMAL are brothers (B) TOMAL is APIK's grandfather
(C) TOMAL is APIK's uncle (D) **APIK is TOMAL's son**

30. If 4th of the month falls 5 days after Sunday what day will be on 12th of that month?

- (A) Monday (B) **Saturday**
(C) Sunday (D) Tuesday

31. Reena is taller than Tina but shorter than Mona. Mona is taller than Rupa but shorter than Sheela. If Tina is taller than Rupa who is the shortest among all?

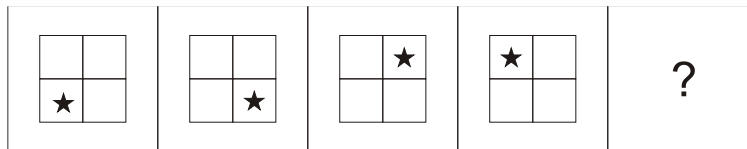
- (A) **Rupa** (B) Sheela
(C) Reena (D) Tina

32. 3 of the 4 below are alike in a certain way. Find the odd one

- (A) **Sailor** (B) Weaver
(C) Tailor (D) Carpenter

All except sailor does not necessarily work on water bodies

33. Which one of the answer figures should come next in the problem figure if they continue to change in an order?

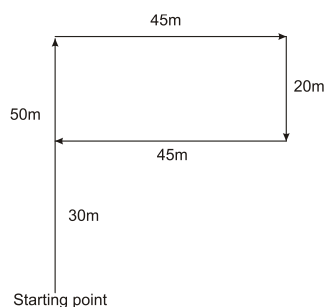


(D)



34. Thaba goes 50 meters north then turns right and walks 45 meters, then again turns right and runs 20 meters, then again turns right and walks 45 meters. How many meters is she from her original position?

- (A) 0 (B) 10
(C) **30** (D) 5

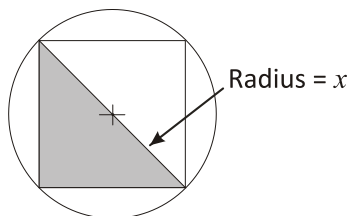


35. In a phone directory which of the following names will appear in the 3rd?



- (A) Sanajaoba (B) Sanahal
(C) Sanayaima (D) **Sanaton**

36. If x is the radius of the circle below, what is the area of the shaded region?



- (A) $4x^2$ (B) **x^2**
(C) $4x$ (D) $\frac{4}{3}x^2$
37. A class starts at 9:00 AM and lasts till 12:35 PM. In this duration four periods are held. Between every period there is a break of 5 minutes. What is the exact duration for each period?
(A) 45 (B) **50**
(C) 55 (D) 60
38. If '+' means 'x', '-' means '+' and 'x' means '÷' the value of $9 + 7 - 45 \times 3 = ?$
(A) -119 (B) 39.67
(C) **78** (D) 66
39. Students of a class are seated in a row. Tomba is in the 7th position from left. Chaoba is in the eight position from the right. There are 5 students in between them. Find the position of Tomba from right.
(A) 15 (B) **14**
(C) 16 (D) 13
40. Improve the sentence by replacing the underlined part of the sentence. If the sentence is correct as it is, the answer is 'no improvement'.
"It had always been better to use preventive measures than to cure illness."
(A) Has always been (B) Was always
(C) Would have always been (D) **Is always**
(E) No Improvement

41. Driven by a **controversial strategy** embraced by its top scientists, **the United Kingdom** went **against Social Distancing** and **Lockdown** and allowed schools, colleges and other public places to remain open initially. Ultimately, it failed and caused widespread outbreak of the disease in UK.

What is the name of the controversial strategy?

- (A) Russian Roulette (B) **Herd Immunity**
(C) Passive Immunity (D) Innate immunity
42. The Indian Council for Medical Research (ICMR) has recommended an antimalarial drug to be used as a preventive medication, by doctors, nurses and other health staff to cope with the coronavirus outbreak in India. What is the name of the Drug?



- (A) Remdesivir
(C) Tamiflu
(B) **Hydroxychloroquine**
(D) Azithromycin

43. What is the **Official names of the coronavirus** responsible for the current pandemic?

- (A) COVID-19
(C) SARS-CoV
(B) **SARS-CoV-2**
(D) MERS

Covid 19 is the name of the disease.

44. One of the preventive measures listed below is inaccurate for the coronavirus outbreak. Find out:

- (A) Wash hands often with soap
(C) Wear Mask
(B) **Maintain at least 300 mm distance between yourself and anyone who is coughing or sneezing.**
(D) Avoid contact with contaminated items

45. One of them is not a disease caused by coronavirus. Find the odd one out

- (A) SARS (Severe Acute Respiratory Syndrome)
(C) **Ebola haemorrhagic fever**
(B) Middle East respiratory syndrome (MERS)
(D) Common Cold

46. Who among the following leaders have been assassinated while in power?

- (A) **Indira Gandhi**
(C) Rajiv Gandhi
(B) Benazir Bhutto
(D) **John F. Kennedy**

Full answer to those who have answered A or D

47. Which Country is not in the SAHEL region of Africa?

- (A) Sudan
(C) Nigeria
(B) Mali
(D) **D.P.R. Congo**

48. Find the odd one?

- (A) **Nay-pi-taw**
(C) Ceylon
(B) Nippon
(D) Kampuchea

Others are old/former names of countries

49. Which one is not a major oil Producing nation

- (A) Venezuela
(C) **Niger**
(B) Russia
(D) USA

50. Which one is not a flag of a Muslim majority country

- (A)
- (B)
- (C)
- (D)

A) Indonesia, B) Kuwait C) Italy(Non Muslim) D) Qatar